

Count the Cubes

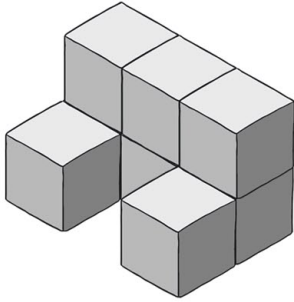
Maths Strategy:

Break the shape up into sections. Count the number of cubes in each layer or column to help you work out the total.

Handy Tip!

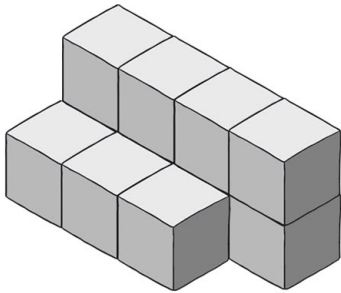
There may be cubes in the shape that you can't see but you will still have to count them.

1.



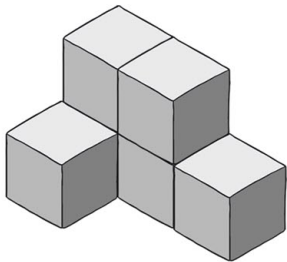
Number of cubes _____

2.



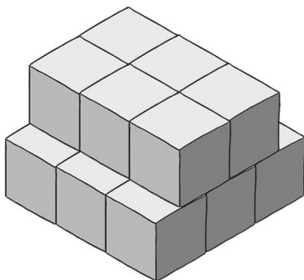
Number of cubes _____

3.



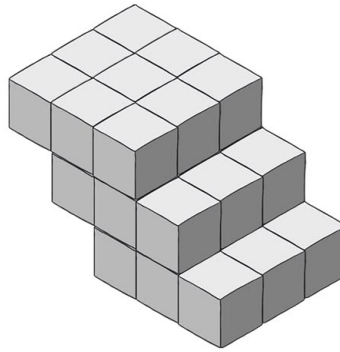
Number of cubes _____

4.



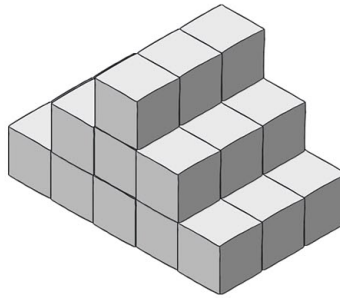
Number of cubes _____

5.



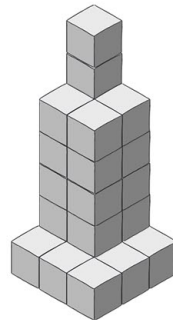
Number of cubes _____

6.



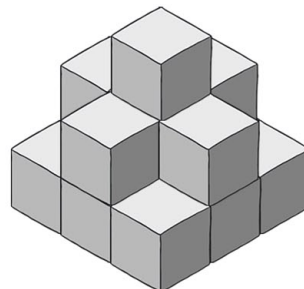
Number of cubes _____

7.



Number of cubes _____

8.



Number of cubes _____

Count the Cubes

Answers

1. 8
2. 11
3. 6
4. 15

5. 27
6. 27
7. 27
8. 14