



Thursday 21<sup>st</sup> January

LO: Fluency

# Flashback 4

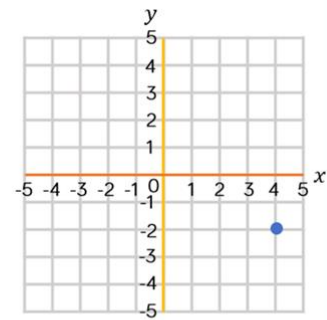
Year 6 | Week 3 | Day 2

1) What percentage is shaded?



2) What is  $28 \div 100$ ?

3) What are the coordinates of the point?



4) Add together 648 m and 2,500 m