

Tuesday 16.06.20

Year 5 Fluency


Flashback 4 Year 5 | Week 1 | Day 2

1) What is 253×3 ?

2) Work out the area of the rectangle



5cm

4cm



3) What is 10^2 ?

4) What is 100 more than 9,308?



16.06.20 Fluency

1) $253 \times 3 = 759$

$$\begin{array}{r} 253 \\ \times 3 \\ \hline 759 \end{array}$$

or mentally

$$\begin{array}{r} 3 \times 200 = 600 \\ 3 \times 50 = 150 \\ 3 \times 3 = 9 \\ \hline 759 \end{array}$$

2) $4 \times 5 = 20 \text{ cm}^2$

3) $10^2 = 10 \times 10 = 100$

4) 9,408