

Quadrilateral Properties

Name: _____



4 equal length sides
2 pairs of parallel sides



4 Equal length sides
4 right angles
2 pairs of parallel sides



2 pairs of parallel sides



2 pairs of equal length sides
4 right angles
2 pairs of parallel sides



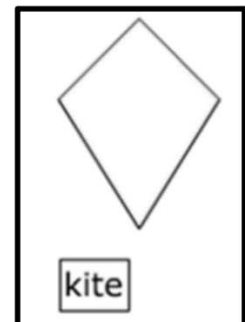
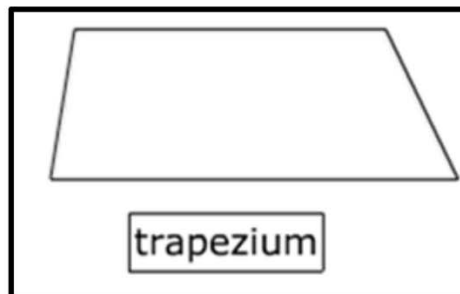
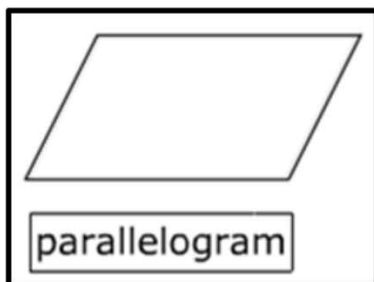
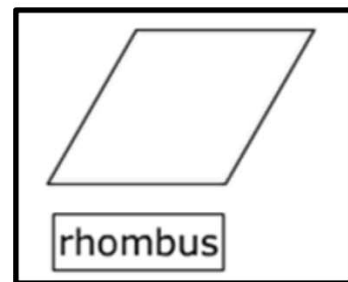
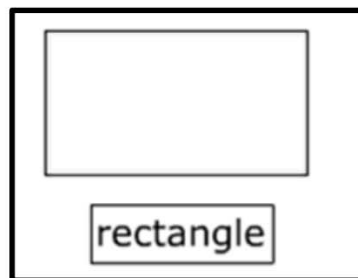
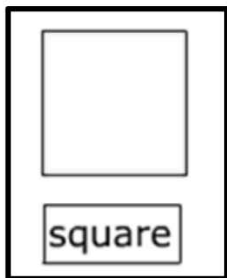
1 pair of parallel sides



2 pairs of equal length sides
adjacent sides are equal lengths

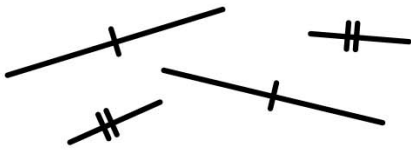
cut here

cut out the quadrilaterals below and place them into the correct boxes above by carefully reading the properties listed.



Now label each shape with the symbols for:

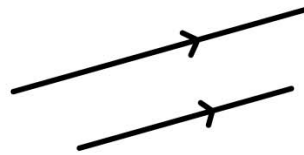
equal lengths



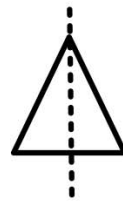
right angles



parallel lines

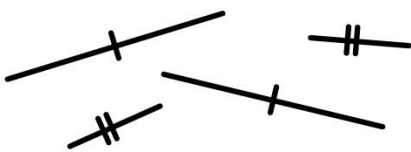


lines of symmetry



Now label each shape with the symbols for:

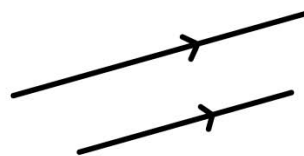
equal lengths



right angles



parallel lines



lines of symmetry

