

















Fluency week beginning 01.02.21

Monday: Fact of the day 15 x 2

Each salamander is worth a different value between 1 and 5.

The total of each horizontal line of salamanders is worked out for you.

				= 10
				= 13
				= 12
				= 19

How much is each salamander worth?

