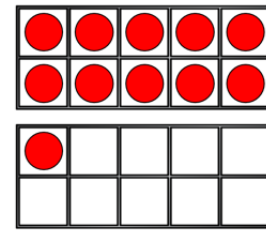


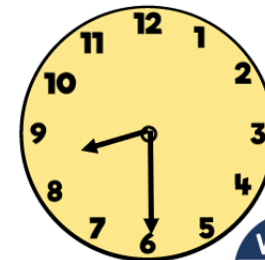
1) Count the money.



2) $54 - 19 = \square$

3) $27 + 20 = \square$

Tens	Ones

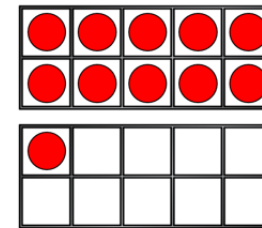


4) What time is shown on the clock?

Flashback 4

Year 2 | Week 9 | Day 2

1) Count the money. 18p



2) $54 - 19 = \boxed{35}$

Tens	Ones

3) $27 + 20 = \boxed{47}$

4) What time is shown on the clock? Half past 8

