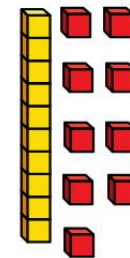



Flashback 4

Year 2 | Week 12 | Day 5

1) $7 \times 10 = \square$



2) Complete the sentence to match the picture.


$\square \times \square = \square$



3) Dexter has £9 and his mum gives him another £5
Dexter buys a box of chocolates.
How much money does he have now?



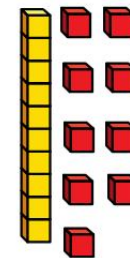

4) One quarter is 5
What is the whole?



Flashback 4

Year 2 | Week 12 | Day 5

1) $7 \times 10 = \boxed{70}$



2) Complete the sentence to match the picture.


$\boxed{4} \times \boxed{4} = \boxed{16}$



3) Dexter has £9 and his mum gives him another £5
Dexter buys a box of chocolates.
How much money does he have now? **£10**



4) One quarter is 5
What is the whole?



20