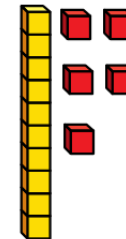


Flashback 4

Year 2 | Week 12 | Day 4

1) $5 \times 5 = \square$ 



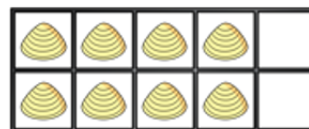
2) Complete the table.

| Addition | Multiplication |
|-------------|----------------|
| $3 + 3 + 3$ | |
| | 2×9 |

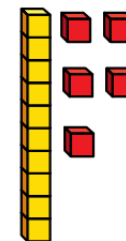
3) Jack has £10 and he spends £7
How much change does Jack get?



4) A quarter of 8 is



1) $5 \times 5 = \boxed{25}$ 



2) Complete the table.

| Addition | Multiplication |
|-------------|----------------|
| $3 + 3 + 3$ | 3×3 |
| $9 + 9$ | 2×9 |

3) Jack has £10 and he spends £7
How much change does Jack get? **£3**



4) A quarter of 8 is $\boxed{2}$

