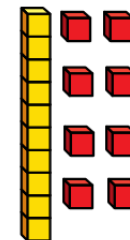



# Flashback 4

Year 2 | Week 12 | Day 3

1) Complete the number track.



2) Complete the sentence.



There are \_\_\_ equal groups with \_\_\_ in each group.

3) Dora has 75p. She wants to buy a balloon.  
How much more money does she need?



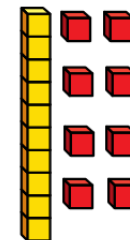
4) A quarter of 16 is

# Flashback 4

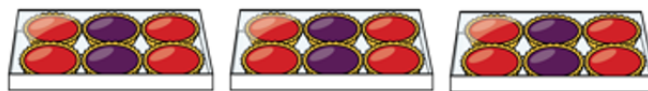
Year 2 | Week 12 | Day 3

1) Complete the number track.

10	12	14	16	18	20
----	----	----	----	----	----



2) Complete the sentence.



There are 3 equal groups with 6 in each group.

3) Dora has 75p. She wants to buy a balloon.  
How much more money does she need? 16p



4) A quarter of 16 is