







It is the end of the week and these are the fruits and vegetables left over from snack time at school. Create a tally chart to show what is left.



Tally Chart		
	Tally	Total
		
		
		
		
		

Now put your data into a pictogram. Draw the fruits into the boxes.  
In your pictogram, one picture should represent 2 pieces of fruit.

A pictogram showing \_\_\_\_\_

<b>banana</b>	<b>carrot</b>	<b>tomato</b>	<b>apple</b>	<b>pear</b>

Questions:

- 1) How many bananas were left?
- 2) How many pears were left?
- 3) How many tomatoes and carrots were left altogether?
- 4) Which fruit had the fewest left?
- 5) How many fruits and vegetables were left altogether?