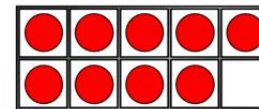
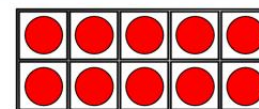



# Flashback 4

Year 2 | Week 10 | Day 2

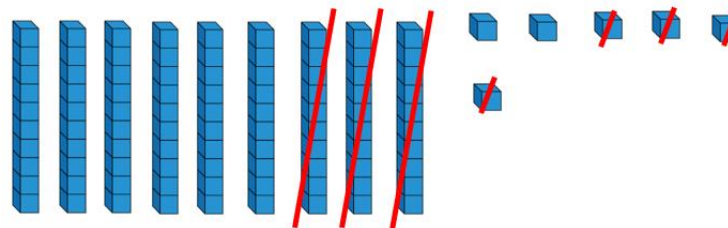
1) Circle the box with the greatest amount.



2) How much money is there altogether?

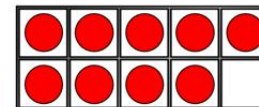
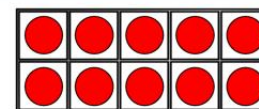


3)  $96 - 34 = \square$



4) Tomorrow is Wednesday, so yesterday was \_\_\_\_\_.

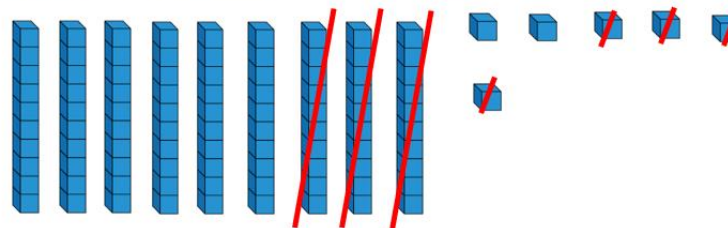
1) Circle the box with the greatest amount.



2) How much money is there altogether? £50



3)  $96 - 34 =$  62



4) Tomorrow is Wednesday, so yesterday was Monday.