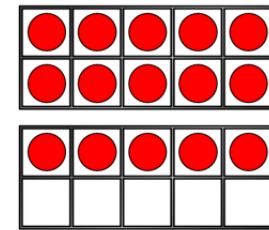


1) Which does not show 35p?

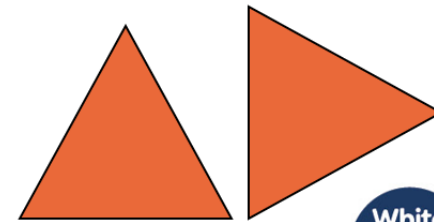


2) Teddy has 7 sweets. Dexter has 8 sweets. Ron has 3 sweets. How many sweets do they have altogether?

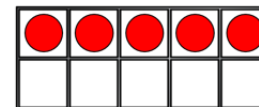
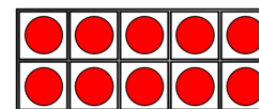

3) $32 + 46 = \square$

4) Complete the sentence.

The triangle has turned a _____ turn.



1) Which does not show 35p?



2) Teddy has 7 sweets. Dexter has 8 sweets. Ron has 3 sweets. How many sweets do they have altogether? 18

3) $32 + 46 = \boxed{78}$

4) Complete the sentence.

The triangle has turned a quarter turn.

