



1) How much money is there altogether?




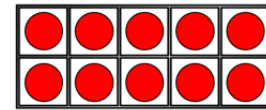
2)  $100 - 83 = \square$

3)  $31 - 8 = \square$

4) How many bread rolls are there altogether?



1) How much money is there altogether?



£11 and 72 p

2)  $100 - 83 = \boxed{17}$

3)  $31 - 8 = \boxed{23}$

4) How many bread rolls are there altogether? **44**

