


Flashback 4

Year 2 | Week 11 | Day 2

1) Complete the sentence.

There are ___ equal groups with ___ in each group.




2) Eva buys a toy train and a lollipop.
How much money does she spend?



3) $50 - 10 = \square$

4) Half of 8 is \square




Flashback 4

Year 2 | Week 11 | Day 2

1) Complete the sentence.

There are 3 equal groups with 3 in each group.



2) Eva buys a toy train and a lollipop.

How much money does she spend? £3 and 75p



3) $50 - 10 =$

4) Half of 8 is

