


Flashback 4

Year 2 | Week 11 | Day 1

- 1) Tommy buys a pineapple and a pear.
He pays with a £1 coin.
How much change will he receive?

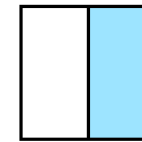
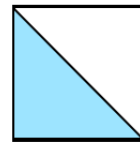


- 2) Write $<$, $>$ or $=$ to compare the amounts.



3) $26 + 15 = \square$


- 4) Which show one half?



Flashback 4

Year 2 | Week 11 | Day 1

- 1) Tommy buys a pineapple and a pear.
He pays with a £1 coin.
How much change will he receive? **45p**



- 2) Write $<$, $>$ or $=$ to compare the amounts.



3) $26 + 15 =$

- 4) Which show one half?

