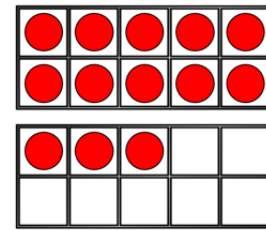
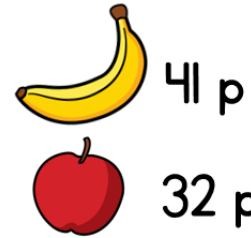



- 1) Eva buys a banana and an apple.  
How much does she spend?



- 2) Complete the bar model.



- 3)  $84 \text{ minus } 36 = \square$



- 4) What time is shown on the clock?

1) Eva buys a banana and an apple.

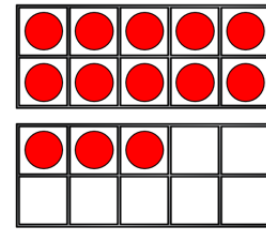


41 p

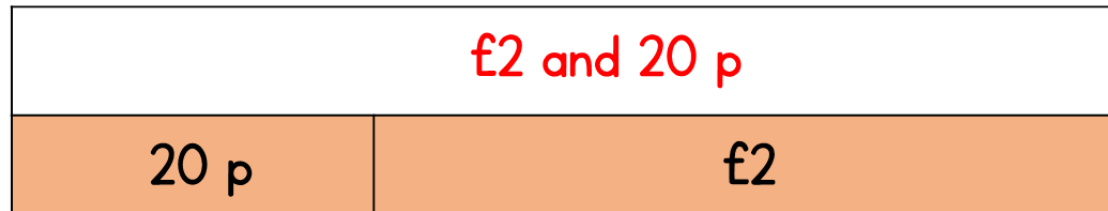
How much does she spend? **73 p**




32 p



2) Complete the bar model.



3) 84 minus 36 = 48



4) What time is shown on the clock? **2 o'clock**