




1) How many strawberries are there?

$$\square + \square = \square$$

$$\square \times \square = \square$$

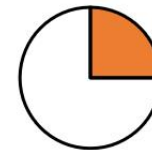
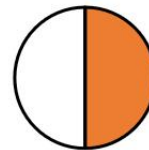


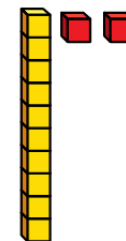
2) Which is the unequal group?



3) $\pounds 5 + 32p = \pounds 5 + 20p + \square$

4) Which shows one quarter?





1) How many strawberries are there?


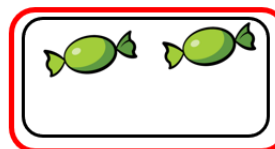
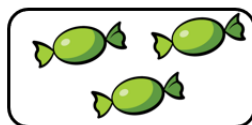

$$\boxed{7} + \boxed{7} = \boxed{14}$$



$$\boxed{2} \times \boxed{7} = \boxed{14}$$



2) Which is the unequal group?



3) $\pounds 5 + 32\text{p} = \pounds 5 + 20\text{p} + \boxed{12\text{p}}$

4) Which shows one quarter?

