

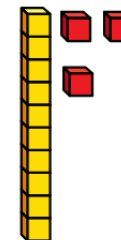
# Flashback 4

Year 2 | Week 11 | Day 4

1) Copy and complete the sentence.



There are \_\_\_ equal groups with \_\_\_ in each group.




2) Mo has £2 and he spends 67p.  
How much change does Mo get?



3)  $45 + \square = 100$

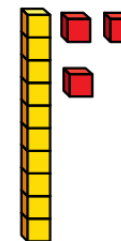
4)  $\square$  is half of 4



1) Copy and complete the sentence.



There are 2 equal groups with 5 in each group.



2) Mo has £2 and he spends 67p.

How much change does Mo get? **£1 and 33p**



3)  $45 + \boxed{55} = 100$

4)  $\boxed{2}$  is half of 4

