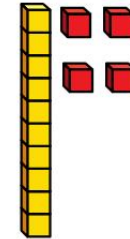
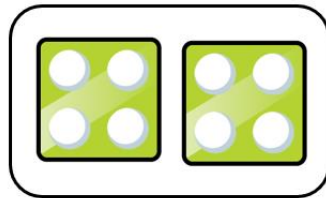



# Flashback 4

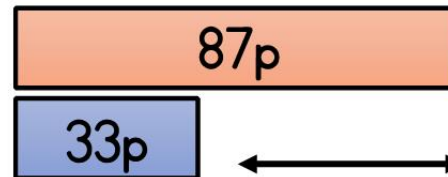
Year 2 | Week 11 | Day 3



1) Which show 4 equal groups with 2 in each group?

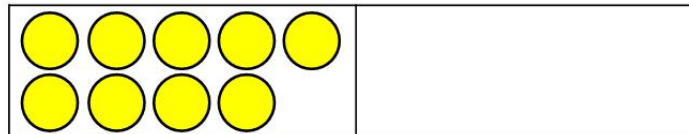


2) Find the difference.



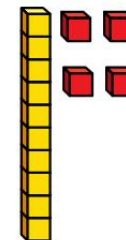
3)  $43 - 8 = \square$

4) 9 is half of  $\square$


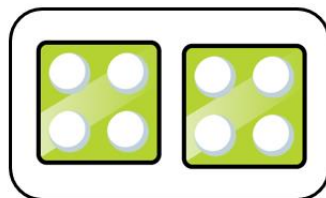



# Flashback 4

Year 2 | Week 11 | Day 3



1) Which show 4 equal groups with 2 in each group?



2) Find the difference.



87p



33p

54p

3)  $43 - 8 = \boxed{35}$

4) 9 is half of  $\boxed{18}$

