

Boxes hold 5 cakes.

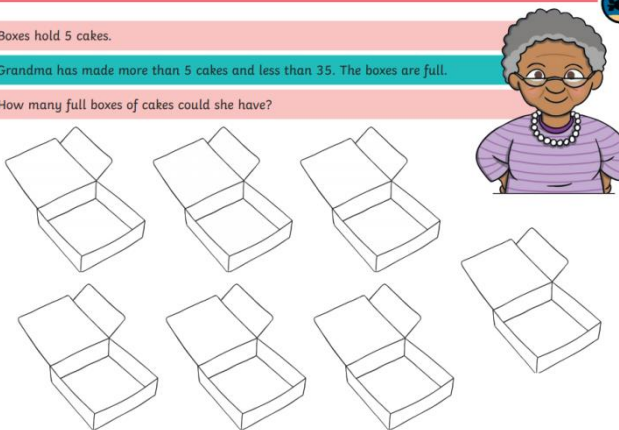
Grandma has made more than 5 cakes and less than 35. The boxes are full.

Count in 5s

Boxes hold 5 cakes.

Grandma has made more than 5 cakes and less than 35. The boxes are full.

How many full boxes of cakes could she have?



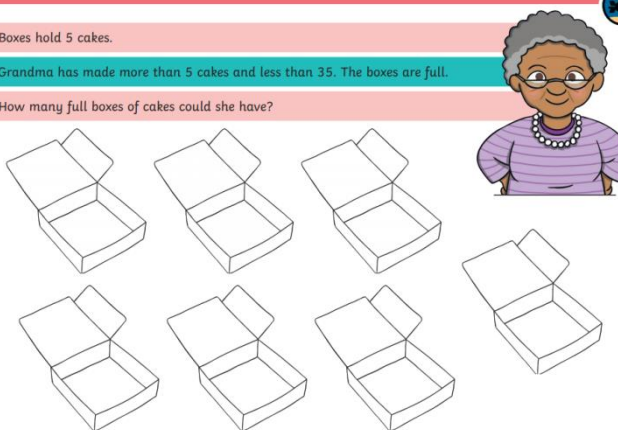
The illustration shows a cartoon grandma with grey hair, glasses, and a purple top. To her left are 10 empty rectangular boxes, arranged in two rows of five. The boxes are simple line drawings with their lids open.

Count in 5s

Boxes hold 5 cakes.

Grandma has made more than 5 cakes and less than 35. The boxes are full.

How many full boxes of cakes could she have?



The illustration shows a cartoon grandma with grey hair, glasses, and a purple top. To her left are 10 empty rectangular boxes, arranged in two rows of five. The boxes are simple line drawings with their lids open.

How many full boxes could she have?

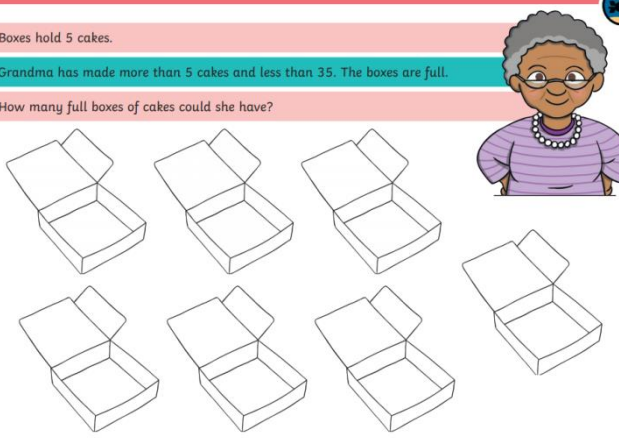
Find all possibilities - you could also write the possibilities as an equation, e.g.  $2 \times 5 = 10$

Count in 5s

Boxes hold 5 cakes.

Grandma has made more than 5 cakes and less than 35. The boxes are full.

How many full boxes of cakes could she have?



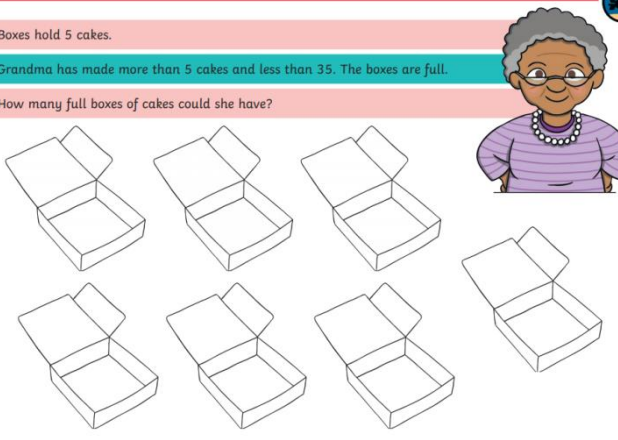
The illustration shows a cartoon grandma with grey hair, glasses, and a purple top. To her left are 10 empty rectangular boxes, arranged in two rows of five. The boxes are simple line drawings with their lids open.

Count in 5s

Boxes hold 5 cakes.

Grandma has made more than 5 cakes and less than 35. The boxes are full.

How many full boxes of cakes could she have?



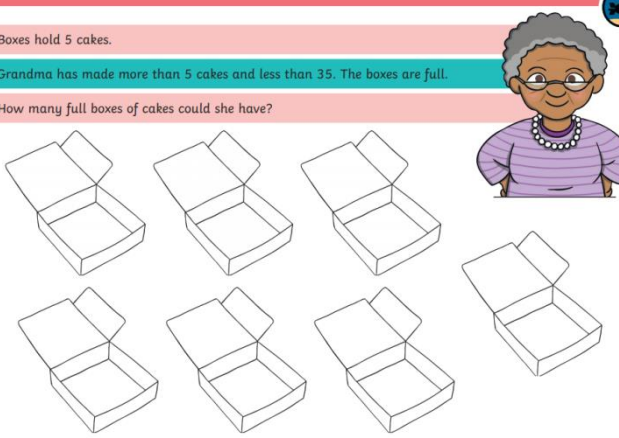
The illustration shows a cartoon grandma with grey hair, glasses, and a purple top. To her left are 10 empty rectangular boxes, arranged in two rows of five. The boxes are simple line drawings with their lids open.

Count in 5s

Boxes hold 5 cakes.

Grandma has made more than 5 cakes and less than 35. The boxes are full.

How many full boxes of cakes could she have?



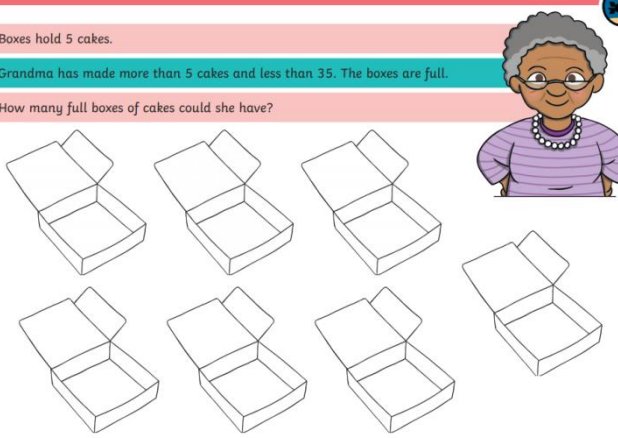
The illustration shows a cartoon grandma with grey hair, glasses, and a purple top. To her left are 10 empty rectangular boxes, arranged in two rows of five. The boxes are simple line drawings with their lids open.

Count in 5s

Boxes hold 5 cakes.

Grandma has made more than 5 cakes and less than 35. The boxes are full.

How many full boxes of cakes could she have?



The illustration shows a cartoon grandma with grey hair, glasses, and a purple top. To her left are 10 empty rectangular boxes, arranged in two rows of five. The boxes are simple line drawings with their lids open.