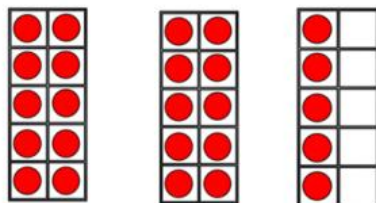



Flashback 4

Year 1 | Week 6 | Day 3

1) What is one more than 25?

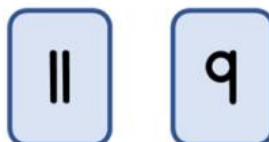


2) Has Eva counted correctly?



29, 31, 32, 33, 34...

3) Which number is greater?



4) How many apples are there altogether?

