



Number Bond Sticks

These number bond sticks are made from 18 white cubes and 2 grey cubes.

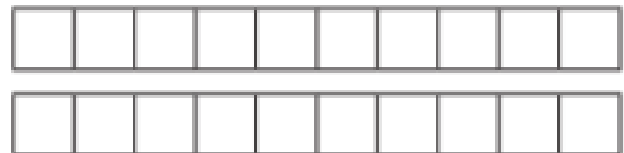


$$\boxed{18} + \boxed{2} = 20$$


Can you use two colours to make your own sticks with number bonds of 20? Write the matching number sentence below each picture.




$$\boxed{} + \boxed{} = 20$$




$$\boxed{} + \boxed{} = 20$$




$$\boxed{} + \boxed{} = 20$$



$$\boxed{} + \boxed{} = 20$$



$$\boxed{} + \boxed{} = 20$$



$$\boxed{} + \boxed{} = 20$$