




Use the dominos to write the addition sentence and answer.




$$\square + \square = \square$$




$$\square + \square = \square$$




$$\square + \square = \square$$



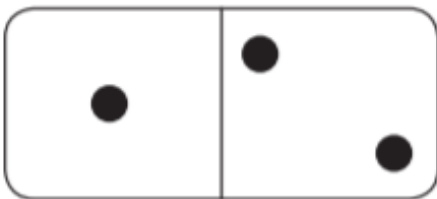
$$\square + \square = \square$$




$$\square + \square = \square$$



$$\square + \square = \square$$



$$\square + \square = \square$$



$$\square + \square = \square$$

Can you also find and write in your books the related bond to 20?  
E.g. the first domino is  $3+6=9$ , which could be  $13+6=19$  or  $3+16=19$ .