

DASHING THROUGH THE SNOW

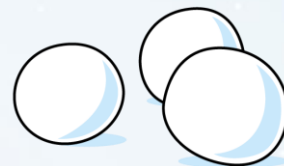



Snowballs

Have a think



How many snowballs?



There are 13 snowballs.


13 is 1 ten and 3 ones.

13 is one more than 12


13 is one less than 14

Snowballs

Have a think



How many snowballs?



There are 16 snowballs.

16 is 1 ten and 6 ones.

16 is one more than 15

16 is one less than 17

Skating

Have a think



There are 10 people skating.



If 6 are adults, how many are children?



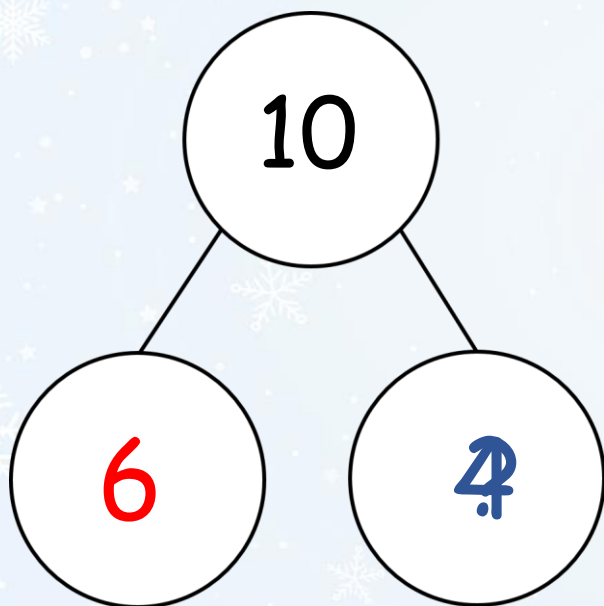
skaters

10	
6	4



adults

children



$$\boxed{6} + \boxed{4} = \boxed{10}$$

What are all of the different groups of adults and children you can make with 10 skaters?



skaters

10	
?	?

adults

children

$$\boxed{?} + \boxed{?} = \boxed{10}$$



Have a think



Amir, Whitney and Eva had a race down the hill.



Who came 1st? Who came 2nd? Who came 3rd?