

# SNOWFLAKES, SNOWFLAKES ALL AROUND



Have a think



## Snowflakes patterns



What section repeats?

What comes next?

Can you make a pattern? What comes next?

Have a think



Snowflakes are falling.  
More than 10 fell, but fewer than 20

How many **might** have fallen?

How much is 1 more?

10	11	12	13	14	15	16	17	18	19	20
----	----	----	----	----	----	----	----	----	----	----


How much is 1 less?

# Snowflakes

Have a think



Can you show 15 using words,  
ten frames, pictures?



fifteen

15 is 1 ten and 5 ones



Have a think



Snowflakes are all different.  
What shapes do you see?



I see 4 triangles.

I see 2 rectangles.

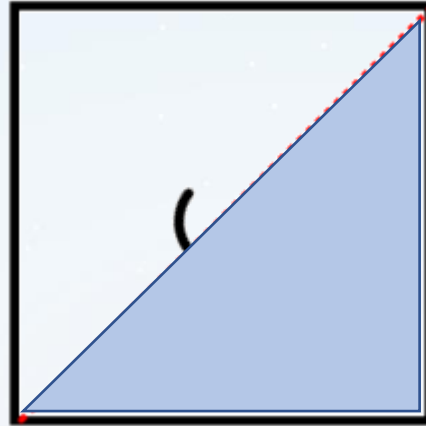
I see 3 circles.

Snowflakes are fun to make!



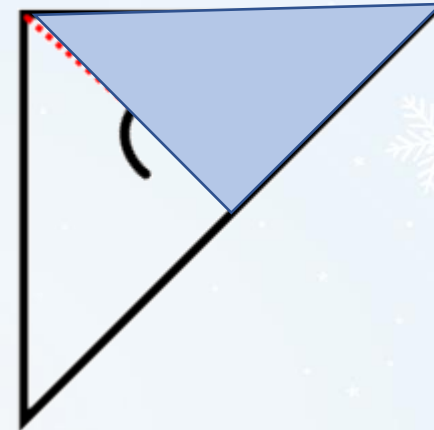
1

1 - Begin with a square



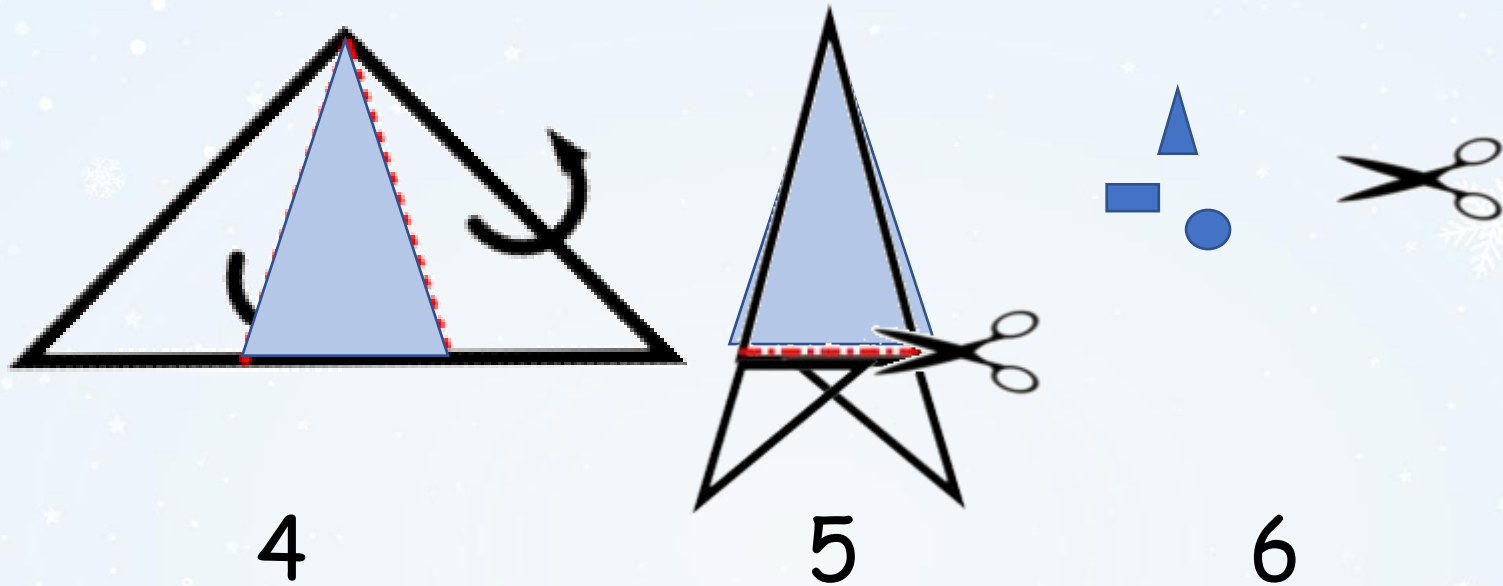
2

2 - Fold it in half to make a triangle



3

3 - Fold it again to make a smaller triangle



4 - Fold as shown

5 - Cut off the bottom triangles

6 - Cut out some shapes and unfold!