

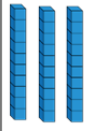
10.01.21 LO: Compare numbers to 50.

1. Read all that Dexter has said, drawn and written carefully to answer:

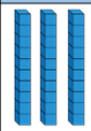

Dexter compares two numbers.

White  
Rose  
Maths

30 is less than 33

| Tens  | Ones |
|---|------|
|  |      |

 $>$ 

| Tens  | Ones  |
|---|---|
|  |  |

Do you agree with Dexter?  
Explain your answer.

2. Draw numbers above 15 and up to 50, you can draw as counters, objects, tens frames or base ten sticks and cube ones. Please create two examples, feel free to add more in your books.

Draw pictures in the boxes to make the comparison true.

