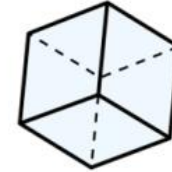



Flashback 4


Year 1 | Week 9 | Day 1



1) How many cubes high is the tube?



2) Complete the sentence using taller or shorter.



The hen is _____ than the horse.

3) Which is greater, 28 or 32?

4) What is $8 + 5$?