

Year 1 Spring 1 Maths Activity Mat 1

Section 1

Put the numbers in order, starting with the lowest.

5 **7** **4**

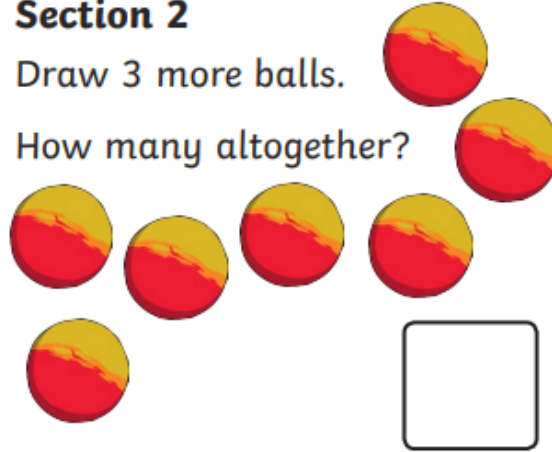
<input type="text"/>	<input type="text"/>	<input type="text"/>
----------------------	----------------------	----------------------



Section 2

Draw 3 more balls.

How many altogether?



Section 3

$$5 - 2 = \square$$

$$6 - 4 = \square$$

Section 4


Imogen has 7 sweets and eats 4 of them. How many sweets are left?



Section 5

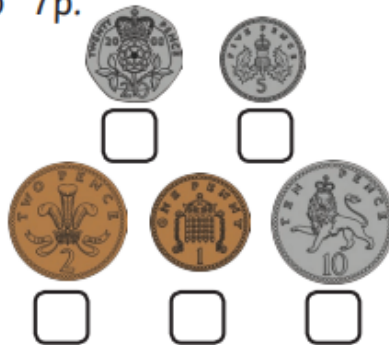
Group the cookies in twos.

How many groups are there?



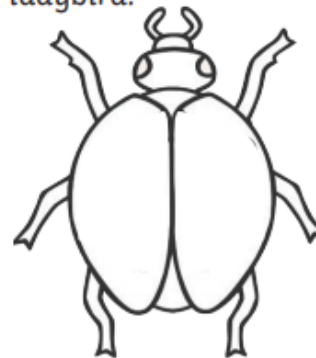
Section 6

Tick the coins which add to 7p.



Section 7

Draw 5 spots onto the ladybird.



Section 8

Fill in the missing number.

4, 5, 6, , 8, 9

