
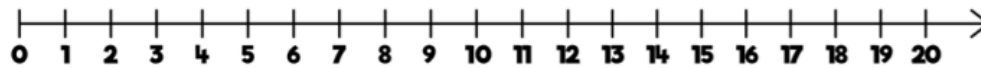


# Flashback 4

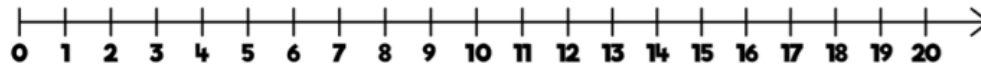
Year 1 | Week 4 | Day 1



1) Calculate  $15 - 4$



2) Calculate  $11 + 4$



3) Write nineteen in numerals.

4) Name the shape.

